




Tavola pitagorica



@emozioniinmatematica

Cosa possiamo osservare in una Tavola Pitagorica?

La proprietà commutativa

X	1	2	3	4	5	6	7	8	9	10
1	1	2	3	4	5	6	7	8	9	10
2	2	4	6	8	10	12	14	16	18	20
3	3	6	9	12	15	18	21	24	27	30
4	4	8	12	16	20	24	28	32	36	40
5	5	10	15	20	25	30	35	40	45	50
6	6	12	18	24	30	36	42	48	54	60
7	7	14	21	28	35	42	49	56	63	70
8	8	16	24	32	40	48	56	64	72	80
9	9	18	27	36	45	54	63	72	81	90
10	10	20	30	40	50	60	70	80	90	100

Osservando i numeri evidenziati proviamo a fare delle ipotesi.

Ci sono altre coppie di numeri che si comportano così?

ES. $5 \times 6 = 6 \times 5$

Coloriamone altre.

Ci serve davvero conoscere tutta la tavola pitagorica, oppure possiamo impararne solo la metà?

Possiamo dire che la tavola pitagorica è simmetrica?



Pari o dispari?

Se ti chiedessi: sono più i numeri pari o quelli dispari?
Tu cosa risponderesti? _____

Prova a colorare i numeri pari. Cosa osservi?

X	1	2	3	4	5	6	7	8	9	10
1	1	2	3	4	5	6	7	8	9	10
2	2	4	6	8	10	12	14	16	18	20
3	3	6	9	12	15	18	21	24	27	30
4	4	8	12	16	20	24	28	32	36	40
5	5	10	15	20	25	30	35	40	45	50
6	6	12	18	24	30	36	42	48	54	60
7	7	14	21	28	35	42	49	56	63	70
8	8	16	24	32	40	48	56	64	72	80
9	9	18	27	36	45	54	63	72	81	90
10	10	20	30	40	50	60	70	80	90	100

E' sì, i numeri pari sono di più! Incredibile vero?!

Perchè il prodotto di due fattori è pari quando almeno uno dei due fattori è pari.
Invece, il prodotto di due fattori è dispari quando entrambi i fattori sono dispari.





@emozioniinmatematica




Tavola pitagorica

Numeri quadrati

X	1	2	3	4	5	6	7	8	9	10
1	1	2	3	4	5	6	7	8	9	10
2	2	4	6	8	10	12	14	16	18	20
3	3	6	9	12	15	18	21	24	27	30
4	4	8	12	16	20	24	28	32	36	40
5	5	10	15	20	25	30	35	40	45	50
6	6	12	18	24	30	36	42	48	54	60
7	7	14	21	28	35	42	49	56	63	70
8	8	16	24	32	40	48	56	64	72	80
9	9	18	27	36	45	54	63	72	81	90
10	10	20	30	40	50	60	70	80	90	100

Prova a disegnare 4x4 e 6x6

Quale forma ottieni?.....

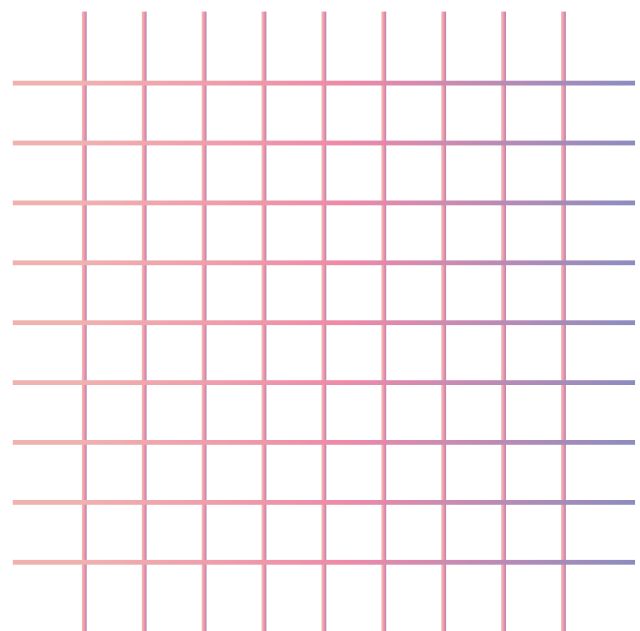
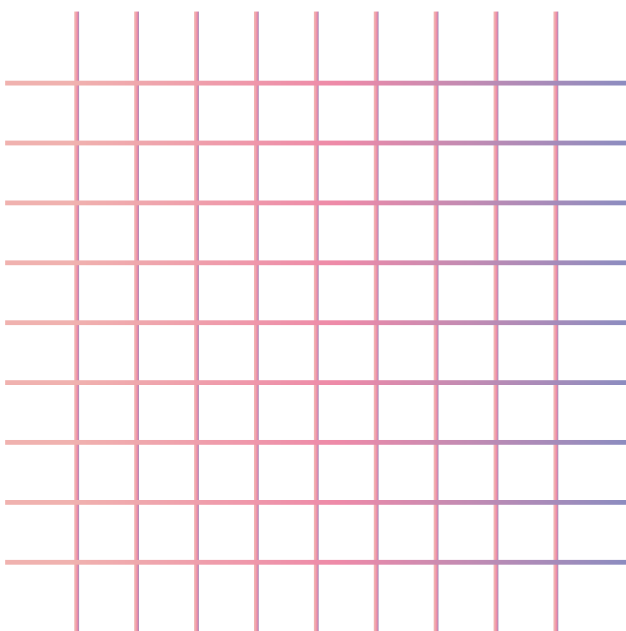



Tavola pitagorica

Multipli



X	1	2	3	4	5	6	7	8	9	10
1	1	2	3	4	5	6	7	8	9	10
2	2	4	6	8	10	12	14	16	18	20
3	3	6	9	12	15	18	21	24	27	30
4	4	8	12	16	20	24	28	32	36	40
5	5	10	15	20	25	30	35	40	45	50
6	6	12	18	24	30	36	42	48	54	60
7	7	14	21	28	35	42	49	56	63	70
8	8	16	24	32	40	48	56	64	72	80
9	9	18	27	36	45	54	63	72	81	90
10	10	20	30	40	50	60	70	80	90	100

Utilizziamo la tavola pitagorica per parlare di multipli

I numeri evidenziati sono tutti multipli di.....





@emozioniinmatematica

Credit: immagini aggiuntive prese da Canva



Colora tutti i multipli di 3



X	1	2	3	4	5	6	7	8	9	10
1	1	2	3	4	5	6	7	8	9	10
2	2	4	6	8	10	12	14	16	18	20
3	3	6	9	12	15	18	21	24	27	30
4	4	8	12	16	20	24	28	32	36	40
5	5	10	15	20	25	30	35	40	45	50
6	6	12	18	24	30	36	42	48	54	60
7	7	14	21	28	35	42	49	56	63	70
8	8	16	24	32	40	48	56	64	72	80
9	9	18	27	36	45	54	63	72	81	90
10	10	20	30	40	50	60	70	80	90	100

Colora tutti i multipli di 4

X	1	2	3	4	5	6	7	8	9	10
1	1	2	3	4	5	6	7	8	9	10
2	2	4	6	8	10	12	14	16	18	20
3	3	6	9	12	15	18	21	24	27	30
4	4	8	12	16	20	24	28	32	36	40
5	5	10	15	20	25	30	35	40	45	50
6	6	12	18	24	30	36	42	48	54	60
7	7	14	21	28	35	42	49	56	63	70
8	8	16	24	32	40	48	56	64	72	80
9	9	18	27	36	45	54	63	72	81	90
10	10	20	30	40	50	60	70	80	90	100




Colora tutti i multipli di 5



X	1	2	3	4	5	6	7	8	9	10
1	1	2	3	4	5	6	7	8	9	10
2	2	4	6	8	10	12	14	16	18	20
3	3	6	9	12	15	18	21	24	27	30
4	4	8	12	16	20	24	28	32	36	40
5	5	10	15	20	25	30	35	40	45	50
6	6	12	18	24	30	36	42	48	54	60
7	7	14	21	28	35	42	49	56	63	70
8	8	16	24	32	40	48	56	64	72	80
9	9	18	27	36	45	54	63	72	81	90
10	10	20	30	40	50	60	70	80	90	100

Colora tutti i multipli di 6

X	1	2	3	4	5	6	7	8	9	10
1	1	2	3	4	5	6	7	8	9	10
2	2	4	6	8	10	12	14	16	18	20
3	3	6	9	12	15	18	21	24	27	30
4	4	8	12	16	20	24	28	32	36	40
5	5	10	15	20	25	30	35	40	45	50
6	6	12	18	24	30	36	42	48	54	60
7	7	14	21	28	35	42	49	56	63	70
8	8	16	24	32	40	48	56	64	72	80
9	9	18	27	36	45	54	63	72	81	90
10	10	20	30	40	50	60	70	80	90	100



@emozioniinmatematica

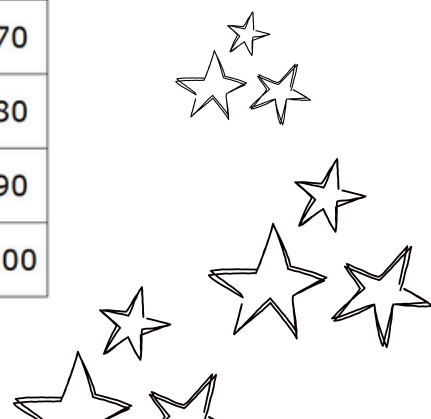


Colora tutti i multipli di 7

X	1	2	3	4	5	6	7	8	9	10
1	1	2	3	4	5	6	7	8	9	10
2	2	4	6	8	10	12	14	16	18	20
3	3	6	9	12	15	18	21	24	27	30
4	4	8	12	16	20	24	28	32	36	40
5	5	10	15	20	25	30	35	40	45	50
6	6	12	18	24	30	36	42	48	54	60
7	7	14	21	28	35	42	49	56	63	70
8	8	16	24	32	40	48	56	64	72	80
9	9	18	27	36	45	54	63	72	81	90
10	10	20	30	40	50	60	70	80	90	100

Colora tutti i multipli di 8

X	1	2	3	4	5	6	7	8	9	10
1	1	2	3	4	5	6	7	8	9	10
2	2	4	6	8	10	12	14	16	18	20
3	3	6	9	12	15	18	21	24	27	30
4	4	8	12	16	20	24	28	32	36	40
5	5	10	15	20	25	30	35	40	45	50
6	6	12	18	24	30	36	42	48	54	60
7	7	14	21	28	35	42	49	56	63	70
8	8	16	24	32	40	48	56	64	72	80
9	9	18	27	36	45	54	63	72	81	90
10	10	20	30	40	50	60	70	80	90	100






Colora tutti i multipli di 9




X	1	2	3	4	5	6	7	8	9	10
1	1	2	3	4	5	6	7	8	9	10
2	2	4	6	8	10	12	14	16	18	20
3	3	6	9	12	15	18	21	24	27	30
4	4	8	12	16	20	24	28	32	36	40
5	5	10	15	20	25	30	35	40	45	50
6	6	12	18	24	30	36	42	48	54	60
7	7	14	21	28	35	42	49	56	63	70
8	8	16	24	32	40	48	56	64	72	80
9	9	18	27	36	45	54	63	72	81	90
10	10	20	30	40	50	60	70	80	90	100



Colora tutti i multipli di 10

X	1	2	3	4	5	6	7	8	9	10
1	1	2	3	4	5	6	7	8	9	10
2	2	4	6	8	10	12	14	16	18	20
3	3	6	9	12	15	18	21	24	27	30
4	4	8	12	16	20	24	28	32	36	40
5	5	10	15	20	25	30	35	40	45	50
6	6	12	18	24	30	36	42	48	54	60
7	7	14	21	28	35	42	49	56	63	70
8	8	16	24	32	40	48	56	64	72	80
9	9	18	27	36	45	54	63	72	81	90
10	10	20	30	40	50	60	70	80	90	100



Giochiamo con la tavola pitagorica



  @emozioniinmatematica

X	1	2	3	4	5	6	7	8	9	10
1	1	2	3	4	5	6	7	8	9	10
2	2	4	6	8	10	12	14	16	18	20
3	3	6	9	12	15	18	21	24	27	30
4	4	8	12	16	20	24	28	32	36	40
5	5	10	15	20	25	30	35	40	45	50
6	6	12	18	24	30	36	42	48	54	60
7	7	14	21	28	35	42	49	56	63	70
8	8	16	24	32	40	48	56	64	72	80
9	9	18	27	36	45	54	63	72	81	90
10	10	20	30	40	50	60	70	80	90	100

Stampa il file su un cartoncino bianco.

Estrai una carta e posiziona una pedina sulla casella corrispondente al risultato o chiedi di individuare i fattori.


Puoi utilizzare come pedine pezzetti di carta colorata o sassolini.

Stampa le tessere, ritagliale
e sfida i tuoi amici




@emozioniinmatematica


Moltiplica
 6×8




Moltiplica
 5×4




Moltiplica
 7×9




Moltiplica
 6×3




Moltiplica
 9×2




Moltiplica
 4×2




Moltiplica
 2×5




Moltiplica
 9×9




Multiplica
 9×8




Multiplica
 3×6




Multiplica
 9×3




Multiplica
 4×6




Multiplica
 3×7




Multiplica
 7×7




Multiplica
 5×5




Multiplica
 4×2




Multiplica
 8×2




Multiplica
 8×5




Multiplica
 9×5




Multiplica
 3×9




Multiplica
 9×4




Multiplica
 4×4




Multiplica
 3×8




Multiplica
 7×5




Multiplica
 5×6




Multiplica
 4×9




Multiplica
 8×6




Multiplica
 8×7




Multiplica
 9×1




Multiplica
 3×3




Multiplica
 4×5




Multiplica
 4×9




Multiplica
 3×5




Multiplica
 7×2




Multiplica
 5×2




Multiplica
 4×2




Multiplica
 8×3




Multiplica
 6×2




45




42




24




15




18




14




16




12




36




50




72




56




64




35




20




21




40




10




27




70




Aggiungi 8
a 40




Aggiungi 5
a 20




È la metà
di 50




È la metà
di 10




È la metà
di 70




È il doppio
di 18




È il doppio
di 12




È il doppio
di 20




È il doppio
di 40




È il doppio
di 15




Aggiungi 4
a 50




Aggiungi 5
a 40




È la metà
di 80




È la metà
di 20




È la metà
di 16




È il doppio
di 16




È il doppio
di 5




È il doppio
di 30




È il doppio
di



È il doppio
di 3





Crea le tue carte, scrivi tu la domanda